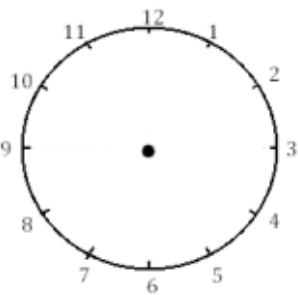


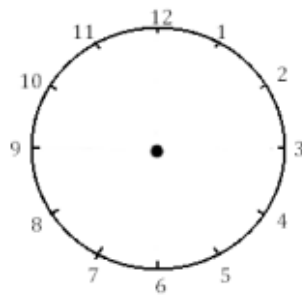
MESURE

LIRE L'HEURE :

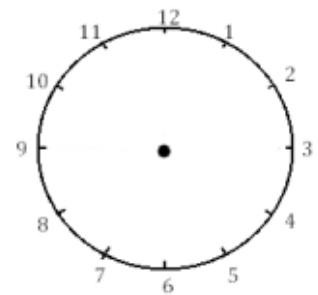
Je place les aiguilles selon les heures indiquées. (heures en rouge, minutes en bleu)



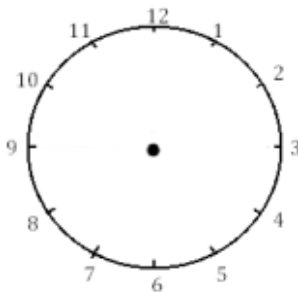
Il est 3 h 00 min.



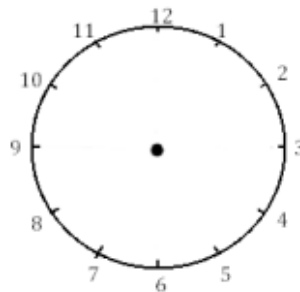
Il est 11 h 00 min.



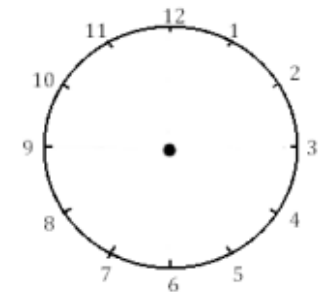
Il est 5 h 00 min.



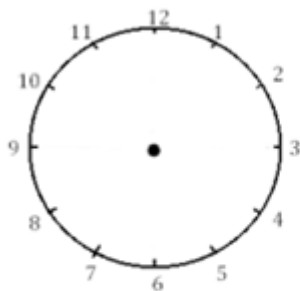
Il est 13 h 00 min.



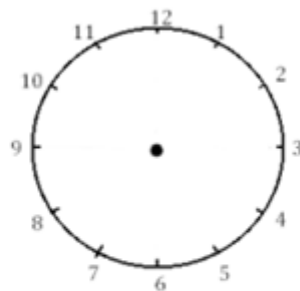
Il est 20 h 00 min.



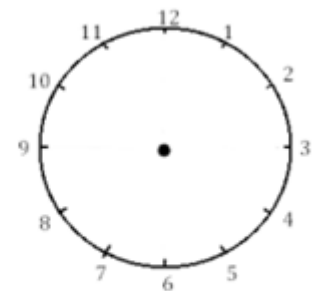
Il est 23 h 00



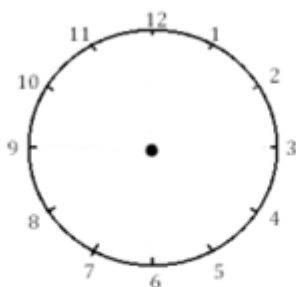
Il est 21 h 30 min.



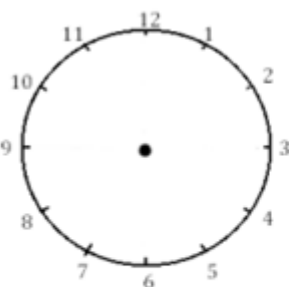
Il est 13 h 30 min.



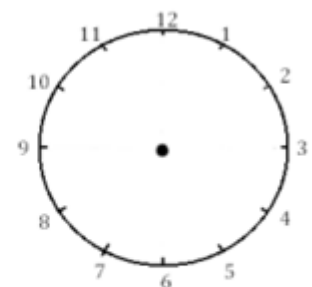
Il est 18 h 30 min.



Il est 23 h 30 min.



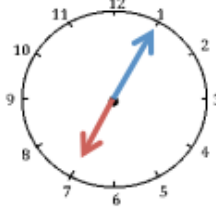
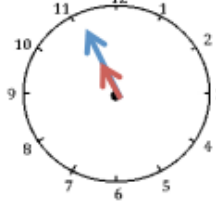


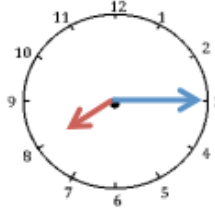
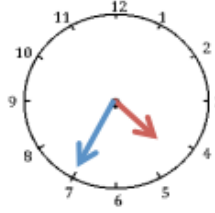
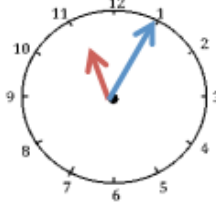
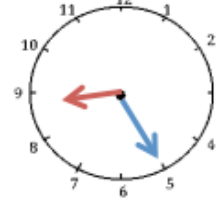
Il est 14 h 00 min.



Il est 18 h 00

Ecris l'heure du matin et l'après-midi.

				
Matin :h.....minh.....minh.....minh.....min
Après-midi :h.....minh.....minh.....minh.....min

				
Matin :h.....minh.....minh.....minh.....min
Après-midi :h.....minh.....minh.....minh.....min

LIRE L'HEURE : PROBLEMES DE DUREES

1. **Regarde la vidéo suivante, puis cherche la réponse aux problèmes suivants en utilisant ton horloge.**

<https://youtu.be/o4UrYVnfj50>



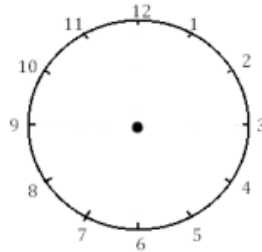
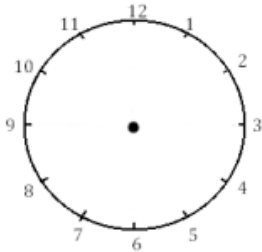
Luc a un entraînement de foot de 14 h 00 à 16 h 00.

Combien de temps a duré l'entraînement ?

Heure du début :

heure de fin :

Réponse :



Lohan et Julie vont au cinéma. Le film commence à 15 et il dure 2h.

A quelle heure se termine le film ?

Heure du début :

heure de fin :

Réponse :

